



Junior Activity Sheet 4

Name:

Date:

1. Read the following questions.
2. Watch the Stay Safe, Stay Clear Video and answer the questions.

For teacher – Link to Stay Safe, Stay Clear video below:

Link: <https://www.esbnetworks.ie/staying-safe/safety-education-group/primary-school>

A. Tick the correct box:

1) The Robot's name is:

Sparky

Smiley

Sandy

2) Electricity is a type of:

sound

energy


magnet

3) Electricity flows through:

wires

rubber

glass






B. List 3 ways we use electricity every day:

1)

2)

3)

C. Draw 2 ways to Stay Safe, Stay Clear around electricity:



*Older Classes Challenge – Fill in the gaps!

- 1) Never fly a kite if there are _____ in sight.
- 2) You should never climb _____.
- 3) Never touch wires on the ground. Tell an _____.